

Relay Question 1

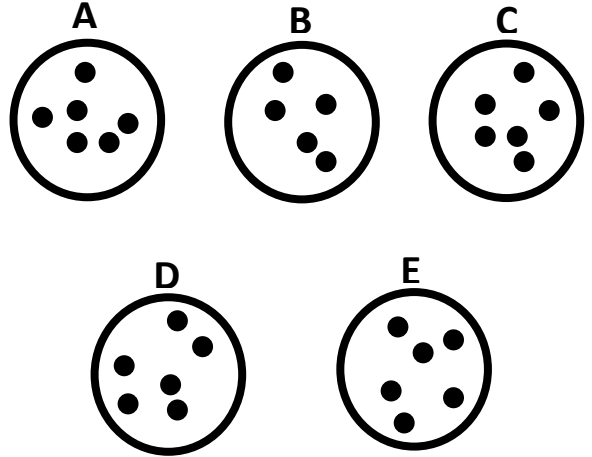
Work out:

$$1 \times 2 \times 3 \times 4 \times 5$$

Answer:


Relay Question 2

Which one is the odd one out?



Answer:

Relay Question 3

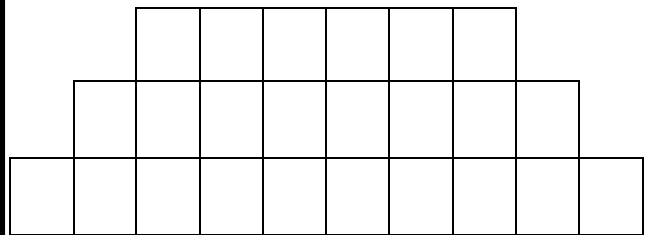


Jenny is bigger than Mary
Mary is smaller than Anne
Anne is bigger than Jenny
Who is the smallest?

Answer:

Relay Question 4

If you keep the pattern of building blocks going to make a triangle, how many would it take altogether?



Answer:

Relay Question 5

If you write out every number from 1 to 99 how many times will you write a number five?

1, 2, 3, 4, (5), 6, ...

Answer:

Relay Question 6

I have
5 faces,
5 corners,
8 edges.

What 3D shape am I?

Answer:

Relay Question 7

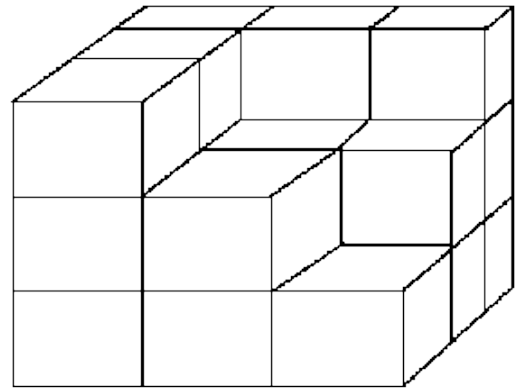
Replace each blank with the correct number

$$\begin{array}{r} 4362 \\ + 4 \square 2 \square \\ \hline \square 2 \square 1 \end{array}$$

Answer:

Relay Question 8

How many cubes would be needed to build this shape?



Answer:

Relay Question 9

Which three numbers
add up to **60**?

23,31,24,15,32,46,25,18,27,37

Answer:

Relay Question 10

I think of a number.
I double it and add 7.
The answer is 29.

What number did I
start with?

Answer:

Relay Question 11

Which picture matches?

-	+	x
+	x	-
x	-	+

A

-	+	x
+	x	-
x	+	-

B

-	+	x
+	x	-
x	-	+

C

+	-	x
-	x	+
x	+	-

Answer:

Relay Question 12

$$A = 1$$

$$B = 2$$

$$C = 3$$

$$D = 4$$

$$E = 5$$

and so on...

$$M + A + T + H + S = ?$$

Answer: